

Cesar Chavez

Cesar Chavez grew up on a farm in Yuma, Arizona. Hard 11
times from the Great Depression caused his father to lose 21
the farm. Cesar's family became migrant workers. They 29
moved from farm to farm in California looking for work. The 40
working conditions at the fields for Cesar and his family were 51
horrible. They had to work long hours with no breaks, with no 63
bathrooms, or clean water to drink. He formed the National 73
Farm Workers Association. There were only a few members 82
at first, because people were scared they would lose their 92
jobs or get beat up for joining. One of Cesar's first major 104
actions was to strike against grape farmers. Cesar and 113
sixty-seven workers decided to march to Sacramento. It 122
took them several weeks to march the 340 miles. The 132
crowd grew larger until thousands of workers arrived in 141
Sacramento. In the end, the grape growers agreed to many 151
of the worker's demands. Cesar continued to work for the 161
rights and working conditions of the migrant farmer. 169

Number of Words Read	Monday	Tuesday	Wednesday	Thursday
1 st Attempt				
2 nd Attempt				
3 rd Attempt				

My Digital Homework Log

Name: _____

Day	Time Spent (15 Min)	Subject	Description (Program: Freckle/Lexia, ST Math /XtraMath/Prodigy/Socrates)
Monday		Reading	
		Math	
Tuesday		Reading	
		Math	
Wednesday		Reading	
		Math	
Thursday		Reading	No Home work
		Math	
Friday		Reading	
		Math	

All sites easily accessed from <https://msbinclass.com/sites-used-in-class/>

Review history Review year → history review

Focus on Non-Fiction: Americana

Name: _____

Betsy Ross and the Flag

Monday

Understanding the Story



What is the main idea of this passage?

Betsy Ross was born in 1752. She ran a shop in the city of Philadelphia, Pennsylvania. She made flags and other things at her shop.



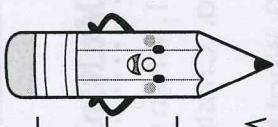
It is said that George

Washington came into Betsy's shop one day. Washington was not the president yet, but he had the important job of making a new flag for America. He asked Betsy to help him make the flag. He

showed Betsy his design. His design had stars with six points on them. He thought stars with five points would be too hard to make. Betsy picked up her scissors and some fabric. She made a five-pointed star very easily! Because of Betsy, Washington changed his design.

The flag, now called The Betsy Ross Flag, has thirteen stars in a circle - one star for each original American **colony**.

Did Betsy Ross really make America's first flag? No one knows for sure, but her story has become a part of American **legend**.



Short Answer Questions

Tuesday

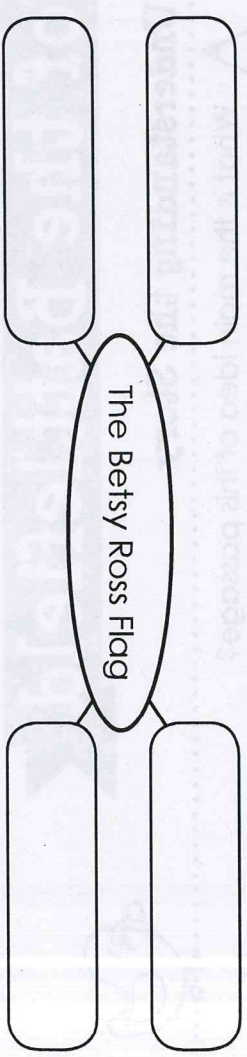
1. What did Betsy change about Washington's flag design?

2. Betsy Ross's house in Philadelphia is now a museum. Do you think it would be interesting to visit her house? Why or why not?

About the Flag

Tuesday

In the boxes, write words which describe The Betsy Ross Flag.



Monday Tuesday Wednesday Thursday Friday Saturday Sunday

The Angel of the Battlefield

Clara Barton was born on Christmas Day in 1821. As a young adult,

Clara worked as a teacher and for the government. When Clara was forty years old, the American Civil War started. The Civil War was a war between the Northern states and the Southern states.



Clara wanted to help. First, she gathered medical supplies. She was soon in charge of a large group of nurses. People called Clara 'The Angel of the

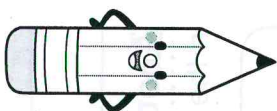
Battlefield' because she was always helping the wounded soldiers. Once, when she was helping a soldier, a bullet whizzed right through the sleeve of her dress!

After the war ended, Clara started the American Red Cross, a group that tries to help people who are suffering. She was the first president of the American Red Cross. She was president for 22 years.

Clara Barton is remembered for helping many people during the war and after.

Understanding the Story

What is the main idea of this passage?



Fill in the Blank

1. Before the war, Clara worked as a _____ and for the _____.
2. Clara was in charge of a large group of _____.
3. After the war ended, Clara started the American _____.

Multiple Choice Questions

1. When was Clara Barton born?
 - a. Christmas Day.
 - b. Easter Sunday.
 - c. New Year's Eve.
2. What happened when Clara was forty years old?
 - a. She went to college.
 - b. She got married.
 - c. The Civil War began.
3. How long was Clara the president of the American Red Cross?
 - a. 12 years.
 - b. 22 years.
 - c. 32 years.



Name _____

Practice

7-3

Division as Repeated Subtraction

Monday

Use counters or draw a picture to solve.

1. 18 pens
3 pens in each box
How many boxes?

2. 24 students
3 students on each team
How many teams?

3. 35 stickers
5 stickers on each sheet
How many sheets?

4. 30 leaves
6 leaves painted on each vase
How many vases?

5. **Number Sense** What division sentence means the same as the following subtraction sentences?

$$12 - 4 = 8$$

$$8 - 4 = 4$$

$$4 - 4 = 0$$

6. Tandem bicycles are ridden by 2 people. If 14 people rented tandem bicycles, how many bicycles were rented?

7. **Explain It** Tamara says that $15 \div 3 = 5$. Is she correct? Explain.

8. Keisha has to carry 32 boxes to her room. She can carry 4 boxes on each trip. How many trips will she take?

A 6

B 7

C 8

D 9

Name _____

Reteaching

8-1

Relating Multiplication and Division

Tuesday

You can use multiplication facts to understand division.
Fact families show how multiplication and division are related.

Here is the fact family for 3, 8, and 24:

$$3 \times 8 = 24$$

$$24 \div 3 = 8$$

$$8 \times 3 = 24$$

$$24 \div 8 = 3$$

Complete. Use counters or draw a picture to solve.

1. $3 \times \square = 6$

$$6 \div 3 = \square$$

2. $7 \times \square = 14$

$$14 \div 7 = \square$$

3. $5 \times \square = 20$

$$20 \div 5 = \square$$

4. $4 \times \square = 24$

$$24 \div 4 = \square$$

5. **Number Sense** What other number is a part of this fact family? 3, 4, _____

6. There are 28 days in 4 weeks. What fact family would you use to find the number of days in 1 week?

7. There are 12 inches in 1 foot. What fact family would you use to find the number of inches in 2 feet?

Name _____

Practice

8-1

Relating Multiplication and Division

Wednesday

Complete. Use counters or draw a picture to help.

1. $5 \times \square = 15$

$15 \div 5 = \square$

2. $6 \times \square = 24$

$24 \div 6 = \square$

3. $7 \times \square = 35$

$35 \div 7 = \square$

4. $5 \times \square = 25$

$25 \div 5 = \square$

5. $3 \times \square = 12$

$12 \div 3 = \square$

6. $3 \times \square = 27$

$27 \div 3 = \square$

7. **Number Sense** Write a fact family for 3, 6, and 18.

8. Patrick purchased 12 books. He needed 4 books for each of his projects at school. How many projects did he have?

9. **Draw a Picture** Draw an array. Then write a fact family to describe your array.

10. **Explain It** Evan told his class that the people in his family have 14 legs altogether. Quinton said that there must be 7 people in Evan's family. Is Quinton correct? Explain.

11. Which number makes this number sentence true? $\blacksquare \div 6 = 8$

A 2

B 14

C 24

D 48

Relating Multiplication and Division

Name _____

Complete. Use counters or draw a picture to help.

1. $5 \times \square = 15$ 2. $6 \times \square = 24$ 3. $7 \times \square = 35$

4. $8 \times \square = 24$ 5. $9 \times \square = 36$ 6. $10 \times \square = 40$

7. $12 \div 3 = \square$ 8. $15 \div 5 = \square$ 9. $20 \div 4 = \square$

10. $24 \div 6 = \square$ 11. $30 \div 5 = \square$ 12. $35 \div 7 = \square$

13. Number Sense Write a fact family for 4, 8, and 16.

8. Patrick purchased 12 books. He needed 4 books for each of his projects. How many projects did he have?
9. Draw a Picture Draw an array. Then write a fact family to describe your array.

10. Explain If Evan told his class that the people in his family have 14 legs altogether, Courtney said that there must be 4 people in Evan's family. Is Courtney correct? Explain.

11. Which number makes this number sentence true? $\square \div 3 = 8$
- A 2 B 14 C 24 D 48